



ALUNO(A): \_\_\_\_\_

PROFESSORA: PAMELA FICAGNA

1- DESCUBRA A CHAVE QUE ABRE CADA CADEADO RESOLVENDO AS ADIÇÕES.

The padlocks and their corresponding addition problems are:

- Padlock 1:  $7+5$
- Padlock 2:  $8+6$
- Padlock 3:  $9+1$
- Padlock 4:  $4+4$
- Padlock 5:  $8+5$
- Padlock 6:  $7+4$

The keys and their corresponding numbers are:

- Key 1: 14
- Key 2: 10
- Key 3: 12
- Key 4: 13
- Key 5: 11
- Key 6: 8

profrafaelak.blogspot.com















SALA DE RECURSO – TURMA B - ATIVIDADES REMOTAS DE 02/08 A 06/08


ALUNO(A): \_\_\_\_\_

PROFESSORA: PAMELA FICAGNA

1- JUNTE AS SÍLABAS DOS PEIXINHOS E ESCREVA AS PALAVRAS.




1- LIGUE OS NÚMEROS AO NOME E ÀS QUANTIDADES.




2

TRÊS



1





DOIS



3

UM

2- ESCREVA A QUANTIDADE DE CADA FRUTA.



3- QUAL DESSAS FRUTAS TEM A COR VERMELHA?

\_\_\_\_\_

4- QUAL FRUTA APRESENTA MAIOR QUANTIDADE?

\_\_\_\_\_

